

Name \_\_\_\_\_ Date \_\_\_\_\_

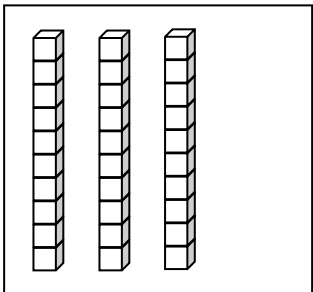
Draw quick tens and ones to show the number. Then draw 1 more or 10 more.

1.          1 more than 38 is _____.	2.          10 more than 38 is _____.
3.          1 more than 35 is _____.	4.          10 more than 35 is _____.

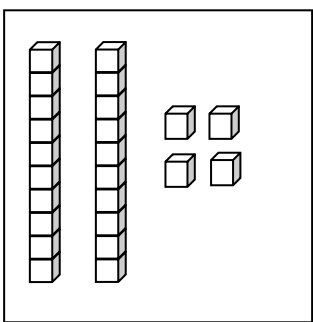
Draw quick tens and ones to show the number. Cross off (x) to show 1 less or 10 less.

5.          10 less than 23 is _____.	6.          1 less than 23 is _____.
7.          10 less than 31 is _____.	8.          1 less than 31 is _____.

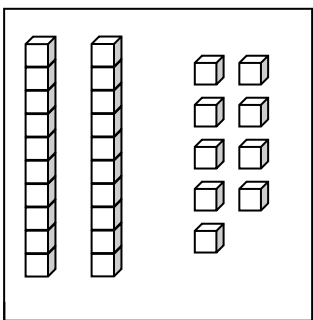
Match the words to the picture that shows the right amount.

9. 

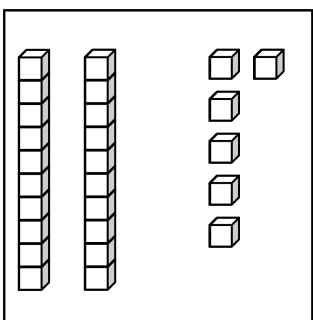
● 1 less than 30.

10. 

● 1 more than 23 is 24.

11. 

● 10 less than 36.

12. 

● 10 more than 20.