
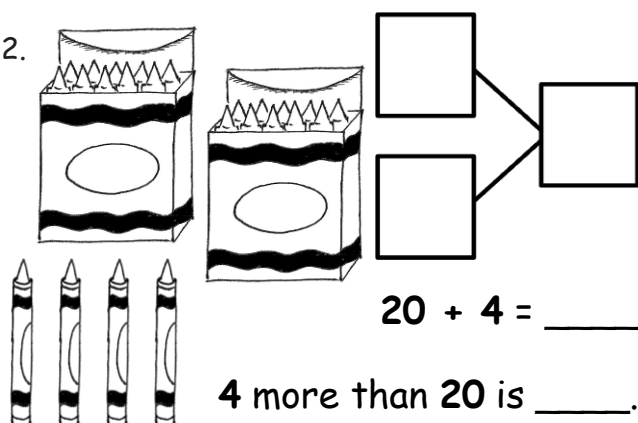
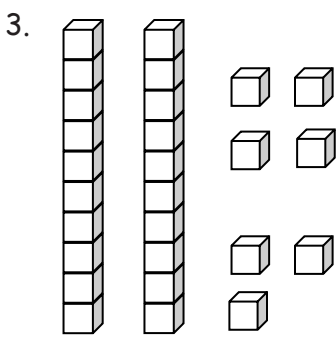
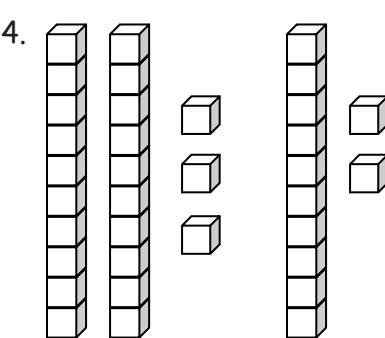
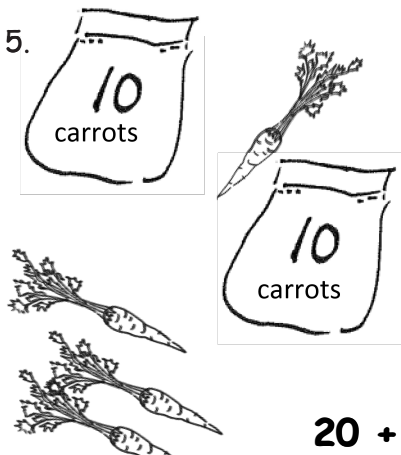
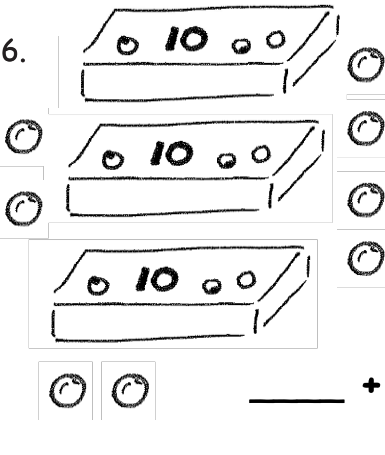


Name _____


Date _____

Fill in the number bond or write the tens and ones. Complete the addition sentences.

<p>1. </p> <div style="display: flex; align-items: center;"> <table border="1" style="border-collapse: collapse; margin-right: 10px;"> <tr><td style="width: 30px; height: 30px;"></td></tr> <tr><td style="width: 30px; height: 30px;"></td></tr> </table> <div style="font-size: 2em;">}</div> <table border="1" style="border-collapse: collapse; margin-left: 10px;"> <tr><td style="width: 40px; height: 40px;"></td></tr> </table> </div> <p style="margin-top: 10px;">$3 + 20 = \underline{\quad}$</p> <p>20 more than 3 is $\underline{\quad}$.</p>				<p>2. </p> <div style="display: flex; align-items: center;"> <table border="1" style="border-collapse: collapse; margin-right: 10px;"> <tr><td style="width: 30px; height: 30px;"></td></tr> <tr><td style="width: 30px; height: 30px;"></td></tr> </table> <div style="font-size: 2em;">}</div> <table border="1" style="border-collapse: collapse; margin-left: 10px;"> <tr><td style="width: 40px; height: 40px;"></td></tr> </table> </div> <p style="margin-top: 10px;">$20 + 4 = \underline{\quad}$</p> <p>4 more than 20 is $\underline{\quad}$.</p>					
<p>3. </p> <table border="1" style="border-collapse: collapse; margin-left: auto; margin-right: auto;"> <thead> <tr> <th style="padding: 5px;">tens</th> <th style="padding: 5px;">ones</th> </tr> </thead> <tbody> <tr> <td style="width: 40px; height: 40px;"></td> <td style="width: 40px; height: 40px;"></td> </tr> </tbody> </table> <p style="margin-top: 10px;">$7 + 20 = \underline{\quad}$</p>	tens	ones			<p>4. </p> <table border="1" style="border-collapse: collapse; margin-left: auto; margin-right: auto;"> <thead> <tr> <th style="padding: 5px;">tens</th> <th style="padding: 5px;">ones</th> </tr> </thead> <tbody> <tr> <td style="width: 40px; height: 40px;"></td> <td style="width: 40px; height: 40px;"></td> </tr> </tbody> </table> <p style="margin-top: 10px;">$\underline{\quad} + 30 = \underline{\quad}$</p>	tens	ones		
tens	ones								
tens	ones								
<p>5. </p> <table border="1" style="border-collapse: collapse; margin-left: auto; margin-right: auto;"> <thead> <tr> <th style="padding: 5px;">tens</th> <th style="padding: 5px;">ones</th> </tr> </thead> <tbody> <tr> <td style="width: 40px; height: 40px;"></td> <td style="width: 40px; height: 40px;"></td> </tr> </tbody> </table> <p style="margin-top: 10px;">$20 + \underline{\quad} = \underline{\quad}$</p>	tens	ones			<p>6. </p> <table border="1" style="border-collapse: collapse; margin-left: auto; margin-right: auto;"> <thead> <tr> <th style="padding: 5px;">tens</th> <th style="padding: 5px;">ones</th> </tr> </thead> <tbody> <tr> <td style="width: 40px; height: 40px;"></td> <td style="width: 40px; height: 40px;"></td> </tr> </tbody> </table> <p style="margin-top: 10px;">$\underline{\quad} + \underline{\quad} = \underline{\quad}$</p>	tens	ones		
tens	ones								
tens	ones								

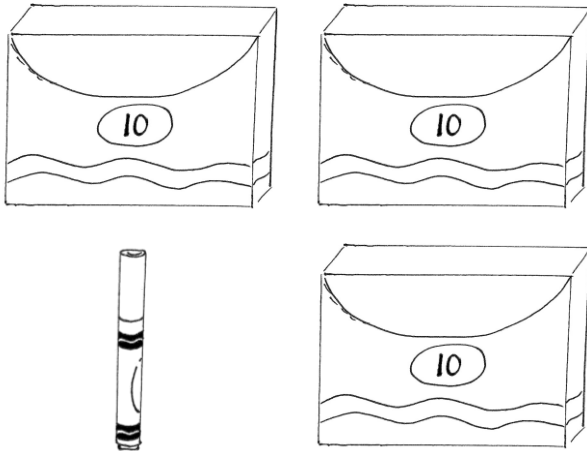
Match the pictures with the words.

7.




1 and 30 make _____.

8.



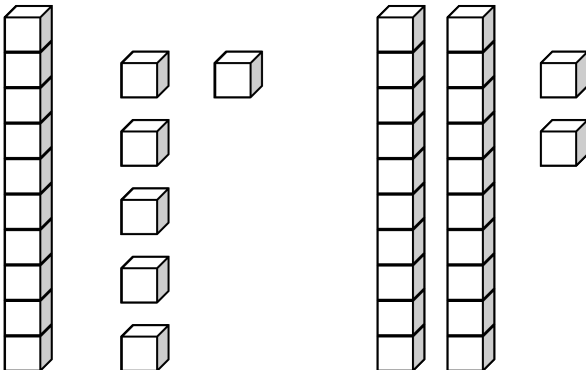
$8 + 30 =$ _____.

9.



2 more than 10 is _____.

10.



$20 + 4 =$ _____.