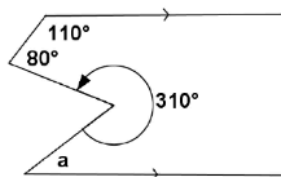


Lesson 7 HW

Use as TOD's and HW

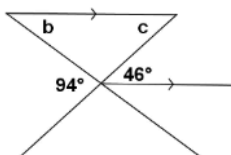
Find the unknown (labeled) angles. Give reasons for your solutions.

1.



$$m\angle a = \underline{\hspace{2cm}}$$

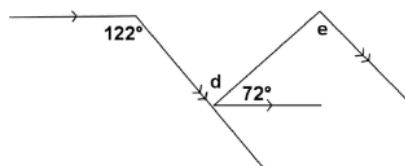
2.



$$m\angle b = \underline{\hspace{2cm}}$$

$$m\angle c = \underline{\hspace{2cm}}$$

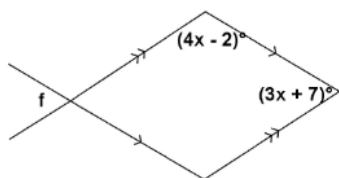
3.



$$m\angle d = \underline{\hspace{2cm}}$$

$$m\angle e = \underline{\hspace{2cm}}$$

4.



$$m\angle f = \underline{\hspace{2cm}}$$