

Name _____

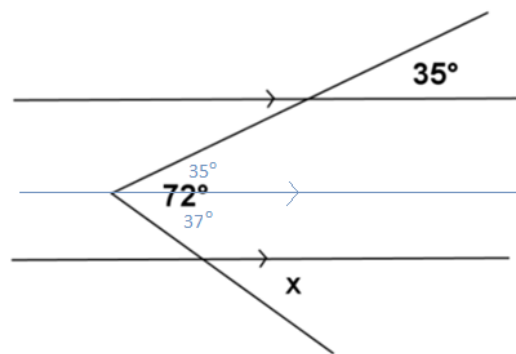
Date _____

Geometry

Lesson 8 Module 1

Warm Up

Find the measure of angle x in the figure to the right. Explain your calculations. (Hint: Draw an auxiliary line segment.)



Name _____

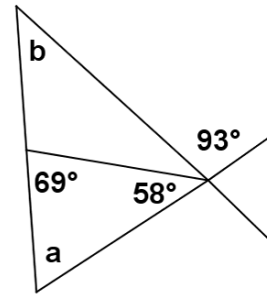
Date _____

Geometry

Lesson 8 Module 1

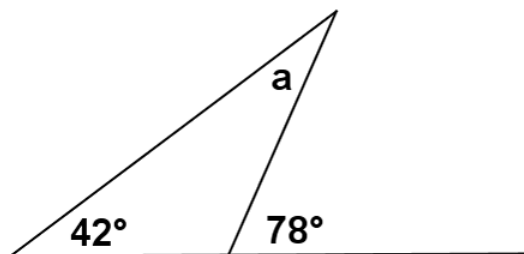
Classwork

1. Find the measures of angles a and b in the figure to the right. Justify your results.

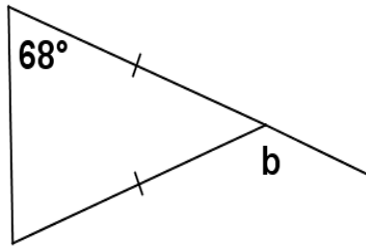


In each figure, determine the measures of the unknown (labeled) angles. Give reasons for your calculations.

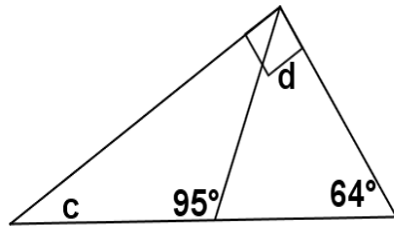
2.



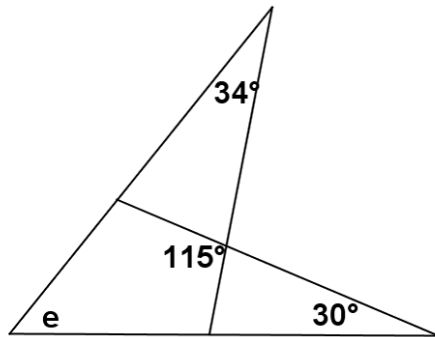
3.



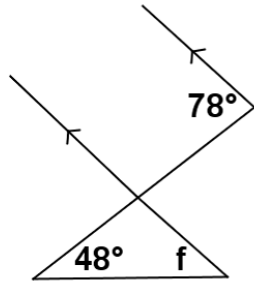
4.



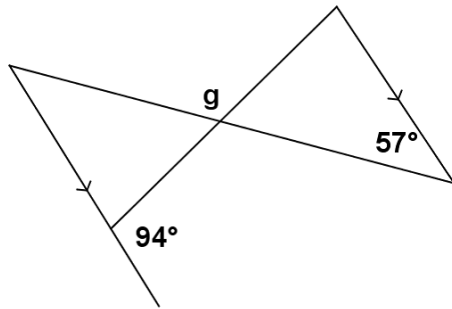
5.



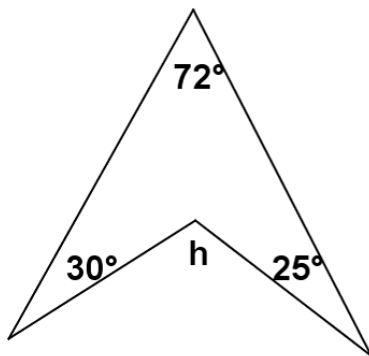
6.



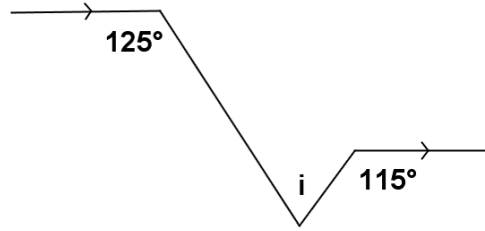
7.



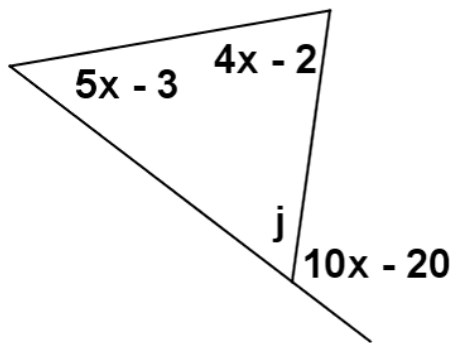
8.



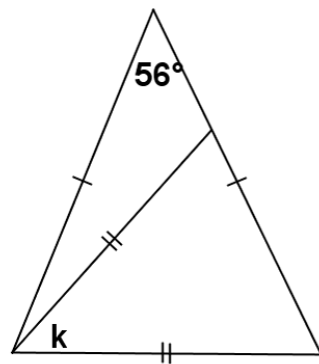
9.



10.



11.



Name _____

Date _____

Geometry

Lesson 8 Module 1

Vocabulary

Facts about angles in a triangle

1. The sum of the 3 angle measures of any triangle is _____
2. _____: A point lies in the *interior of a triangle* if it lies in the interior of each of the angles of the triangle.
3. In any triangle, the measure of the exterior angle is equal to the sum of the measures of the _____ angles. These are sometimes also known as _____ angles.
4. Base angles of an _____ triangle are equal in measure.
5. Each angle of an _____ triangle has a measure equal to 60° .

Relevant Vocabulary

1. _____: An *isosceles triangle* is a triangle with at least two sides of equal length.
2. _____: Every triangle $\triangle ABC$ determines three angles, namely, $\angle BAC$, $\angle ABC$, and $\angle ACB$. These are called the *angles of $\triangle ABC$* .
3. _____: Let $\angle ABC$ be an interior angle of a triangle $\triangle ABC$, and let D be a point on \overrightarrow{AB} such that B is between A and D . Then $\angle CBD$ is an *exterior angle of the triangle $\triangle ABC$* .