

Name _____

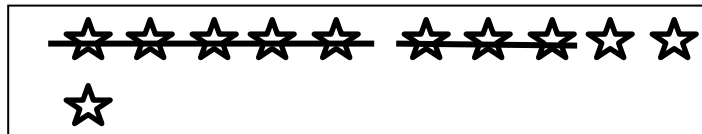
Date _____

1. Match the number sentence to the picture or to the number bond.

a. $13 - 7 = \underline{\quad}$

$\begin{array}{c} 13 \\ \swarrow \searrow \\ 10 \quad 3 \end{array}$	$10 - 7 = 3$ $3 + 3 = 6$
--	-----------------------------


b. $16 - 8 = \underline{\quad}$



c. $11 - 8 = \underline{\quad}$

$\begin{array}{c} 13 \\ \swarrow \searrow \\ 10 \quad 3 \end{array}$	$10 - 8 = 2$ $2 + 3 = 5$
--	-----------------------------

d. $13 - 8 = \underline{\quad}$

2. Show how you would solve $14 - 8$, either with a number bond or a drawing.

Circle 10. Then subtract.

3. Milo has 17 rocks. He throws 8 of them into a pond. How many does he have left?



Milo has _____ rocks left.

Draw and circle 10. Then, subtract.

4. Lucy has \$12. She spends \$8. How much money does she have now?

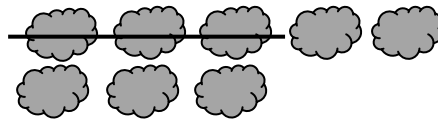
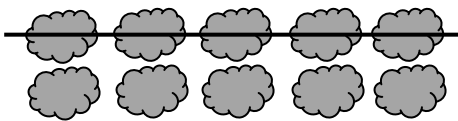
Lucy has \$_____ now.

Draw and circle 10, or use a number bond to break apart the teen number and subtract.

5. Sean has 15 dinosaurs. He gives 8 to his sister. How many dinosaurs does he keep?

Sean keeps _____ dinosaurs.

6. Use the picture to fill in the math story. Show a number sentence.



Olivia saw _____ clouds in the sky.
_____ clouds went away. How many
clouds are left?

Try it! Can you show how to solve
this problem with a number bond?