


Name _____


Date _____

1. Label the shaded part of each picture as one half of the shape or one quarter of the shape.



Which shape has been cut into more equal parts? _____

Which shape has larger equal parts? _____

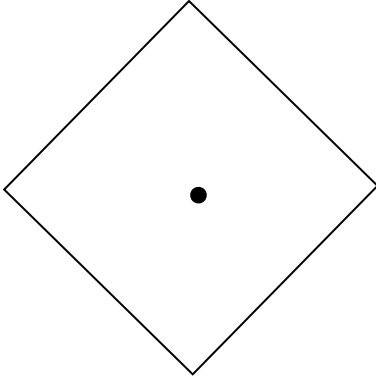
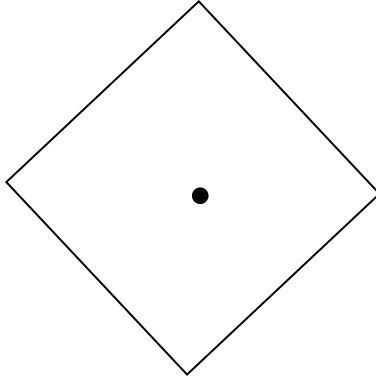




Which shape has smaller equal parts? _____

2. Write whether the shaded part of each shape is a half, a quarter, or a fourth.

 <p>_____</p>	 <p>_____</p>	 <p>_____</p>	 <p>_____</p>
 <p>_____</p>	 <p>_____</p>	 <p>_____</p>	 <p>_____</p>

3. Color part of the shape to match its label. Circle the phrase that would make the statement true.

<p>One quarter of the square</p> 	<p>is bigger than</p> <p>is smaller than</p> <p>is the same size as</p>	<p>one half of the square.</p> 
--	---	---

<p>One quarter of the rectangle</p> 	<p>is bigger than</p> <p>is smaller than</p> <p>is the same size as</p>	<p>one fourth of the rectangle.</p> 
---	---	--