



Name _____




Date _____

Circle the correct clock.


1. Half past 2 o'clock.



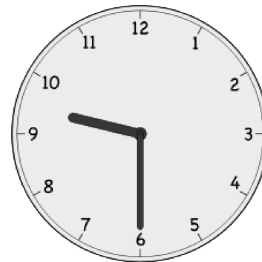


2. Half past 10 o'clock.



3. 6 o'clock.

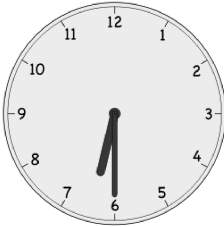


4. Half past 8 o'clock.




Write the time shown on each clock to tell about Lee's day.

5.




Lee wakes up at _____.

6.



He takes the bus to school at _____.

7.



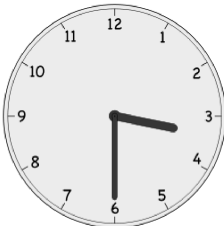
He has math at _____.

8.




He eats lunch at _____.

9.



He has basketball practice at _____.

10.



He does his homework at _____.

11.



He eats dinner at _____.

12.



He goes to bed at _____.