


Name \_\_\_\_\_

Date \_\_\_\_\_

1. Match each clock to the time it shows.


a.



4 o'clock




b.



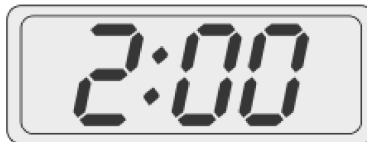
7 o'clock




c.



11 o'clock



d.



10 o'clock



e.



3 o'clock



f.




2 o'clock



2. Put the hour hand on the clock so that the clock matches the time. Then write the time on the line.


a.



6 o'clock

6 : 00


b.



9 o'clock

---


c.



12 o'clock

---


d.



7 o'clock

---

e.



1 o'clock

---