
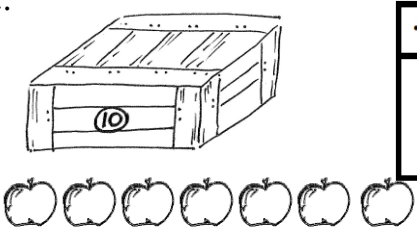








Name \_\_\_\_\_

Date \_\_\_\_\_

Fill in the place value chart and the blanks.

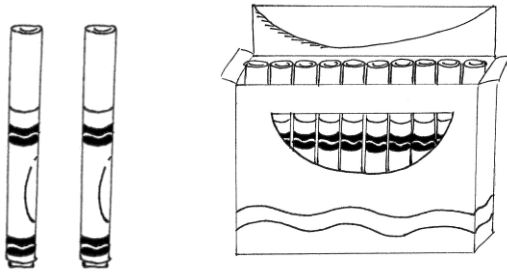
<p>1.</p>  <div style="display: flex; align-items: center; justify-content: center; margin-top: 20px;"> <math>30 = \underline{\hspace{2cm}}</math> tens         </div>	<p>2.</p>  <div style="display: flex; align-items: center; justify-content: center; margin-top: 20px;"> <math>17 = \underline{\hspace{2cm}}</math> ten and <math>\underline{\hspace{2cm}}</math> ones         </div>
<p>3.</p>  <div style="display: flex; align-items: center; justify-content: center; margin-top: 20px;"> <math>\underline{\hspace{2cm}} = 2 \text{ tens } 2 \text{ ones}</math> </div>	<p>4.</p>  <div style="display: flex; align-items: center; justify-content: center; margin-top: 20px;"> <math>\underline{\hspace{2cm}} = 3 \text{ tens } 3 \text{ ones}</math> </div>
<p>5.</p>  <div style="display: flex; align-items: center; justify-content: center; margin-top: 20px;"> <math>\underline{\hspace{2cm}} = \underline{\hspace{2cm}} \text{ tens } \underline{\hspace{2cm}} \text{ ones}</math> </div>	<p>6.</p>  <div style="display: flex; align-items: center; justify-content: center; margin-top: 20px;"> <math>\underline{\hspace{2cm}} = \underline{\hspace{2cm}} \text{ tens } \underline{\hspace{2cm}} \text{ ones}</math> </div>
<p>7.</p>  <div style="display: flex; align-items: center; justify-content: center; margin-top: 20px;"> <math>\underline{\hspace{2cm}} = \underline{\hspace{2cm}} \text{ tens } \underline{\hspace{2cm}} \text{ ones}</math> </div>	<p>8.</p>  <div style="display: flex; align-items: center; justify-content: center; margin-top: 20px;"> <math>\underline{\hspace{2cm}} \text{ tens } \underline{\hspace{2cm}} \text{ ones} = \underline{\hspace{2cm}}</math> </div>



10 more than 25 is 35


Fill in the blank. Draw or cross off tens or ones as needed.

9.



1 more than 12 is \_\_\_\_\_.

10.



10 more than 3 is \_\_\_\_\_.

11.



10 more than 22 is \_\_\_\_\_.

12.



1 more than 22 is \_\_\_\_\_.

13.



1 less than 39 is \_\_\_\_\_.

14.



10 less than 39 is \_\_\_\_\_.

15.



10 less than 33 is \_\_\_\_\_.

16.



1 less than 33 is \_\_\_\_\_.