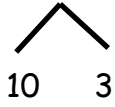
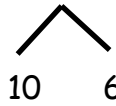
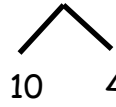
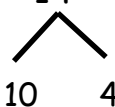
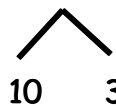



Name _____ Date _____

1. Solve using number bonds. Write the two number sentences that show that you added the ten first. Draw quick tens and ones if that helps you.

<p>a. $13 + 16 = \underline{\quad}$</p>  <p>$16 + 10 = 26$</p> <p>$26 + 3 = 29$</p>	<p>b. $16 + 23 = \underline{\quad}$</p>  <p>$23 + 10 = \underline{\quad}$</p> <p>$\underline{\quad} + 6 = \underline{\quad}$</p>
<p>c. $16 + 14 = \underline{\quad}$</p>  <p>$16 + 10 = \underline{\quad}$</p> <p>$\underline{\quad} + 4 = \underline{\quad}$</p>	<p>d. $14 + 26 = \underline{\quad}$</p>  <p>$26 + 10 = \underline{\quad}$</p> <p>$\underline{\quad} + \underline{\quad} = \underline{\quad}$</p>
<p>e. $17 + 13 = \underline{\quad}$</p>  <p>$\underline{\quad} + \underline{\quad} = \underline{\quad}$</p> <p>$\underline{\quad} + \underline{\quad} = \underline{\quad}$</p>	<p>f. $27 + 13 = \underline{\quad}$</p>  <p>$\underline{\quad} + \underline{\quad} = \underline{\quad}$</p> <p>$\underline{\quad} + \underline{\quad} = \underline{\quad}$</p>

2. Solve using number bonds. The first row has been started for you.

<p>a.</p> $\begin{array}{c} 14 + 13 = \underline{\hspace{2cm}} \\ \swarrow \quad \searrow \\ 10 \quad 3 \end{array}$ $14 + 10 = \underline{\hspace{2cm}}$ $\underline{\hspace{2cm}} + 3 = \underline{\hspace{2cm}}$	<p>b.</p> $24 + 14 = \underline{\hspace{2cm}}$ $\underline{\hspace{2cm}} + \underline{\hspace{2cm}} = \underline{\hspace{2cm}}$ $\underline{\hspace{2cm}} + \underline{\hspace{2cm}} = \underline{\hspace{2cm}}$
<p>c.</p> $15 + 14 = \underline{\hspace{2cm}}$	<p>d.</p> $24 + 15 = \underline{\hspace{2cm}}$
<p>e.</p> $22 + 17 = \underline{\hspace{2cm}}$	<p>f.</p> $27 + 12 = \underline{\hspace{2cm}}$
<p>g.</p> $18 + 12 = \underline{\hspace{2cm}}$	<p>h.</p> $28 + 12 = \underline{\hspace{2cm}}$