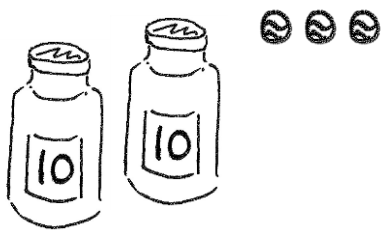


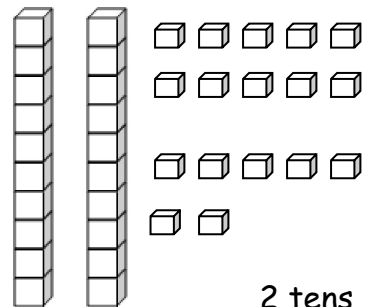
Name \_\_\_\_\_ Date \_\_\_\_\_

1. Fill in the blanks and match the pairs that show the same amount.

a.

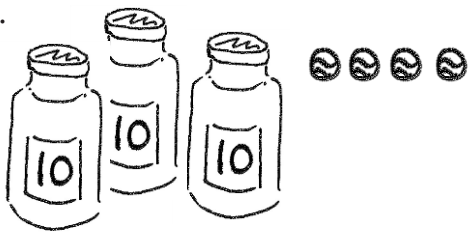


\_\_\_\_\_ tens \_\_\_\_\_ ones

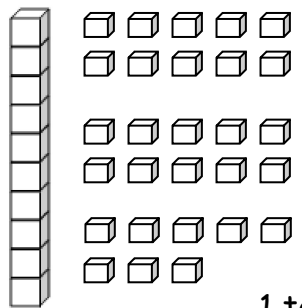


2 tens \_\_\_\_\_ ones

b.

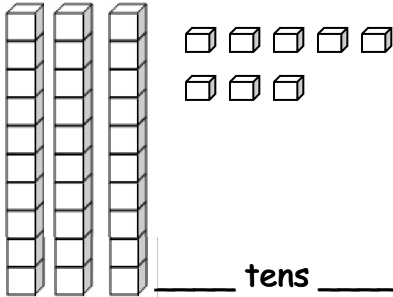


\_\_\_\_\_ tens \_\_\_\_\_ ones

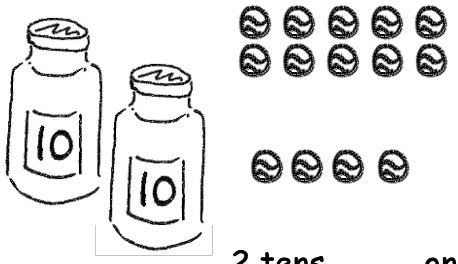


1 ten \_\_\_\_\_ ones

c.

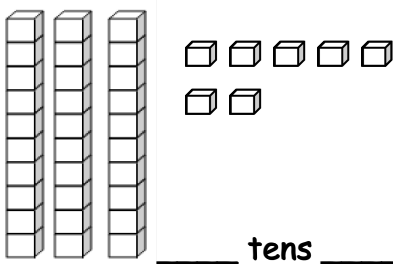


\_\_\_\_\_ tens \_\_\_\_\_ ones

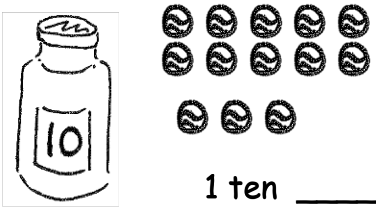


2 tens \_\_\_\_\_ ones

d.



\_\_\_\_\_ tens \_\_\_\_\_ ones



1 ten \_\_\_\_\_ ones

2. Match the place value charts that show the same amount.

tens	ones
2	18

tens	ones
3	8

tens	ones
1	16

tens	ones
2	1

tens	ones
0	21

tens	ones
2	6

3. Check each sentence that is true.

- ☐ 35 is the same as 1 ten 25 ones. ☐ 28 is the same as 1 ten 18 ones.
- ☐ 36 is the same as 2 tens 16 ones. ☐ 39 is the same as 2 tens 29 ones.

4. Emi says that 37 is the same as 1 ten 27 ones, and Ben says that 37 is the same as 2 tens 7 ones. Draw quick tens to show if Emi or Ben is correct.