

Name _____ Date _____

Draw quick tens and ones to help you solve the addition problems.

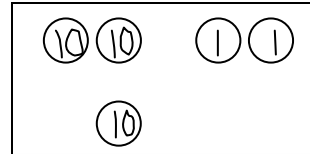
| | |
|---|--|
| 1. $17 + 2 = \underline{\hspace{2cm}}$ | 2. $17 + 3 = \underline{\hspace{2cm}}$ |
| 3. $14 + 3 = \underline{\hspace{2cm}}$ | 4. $24 + 10 = \underline{\hspace{2cm}}$ |

Make a number bond or use the arrow way to solve the addition problems.

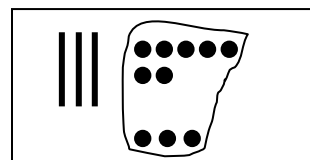
| | |
|---|--|
| 5. $6 + 24 = \underline{\hspace{2cm}}$ | 6. $14 + 20 = \underline{\hspace{2cm}}$ |
|---|--|

Solve each addition sentence and match.

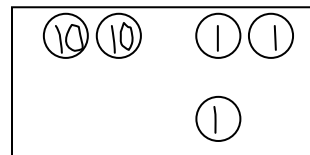
$$22 + 1 = \underline{\hspace{2cm}}$$



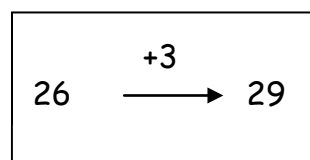
$$13 + 6 = \underline{\hspace{2cm}}$$



$$3 + 26 = \underline{\hspace{2cm}}$$



$$37 + 3 = \underline{\hspace{2cm}}$$



$$22 + 10 = \underline{\hspace{2cm}}$$

