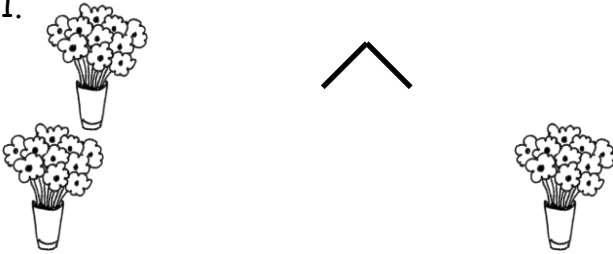
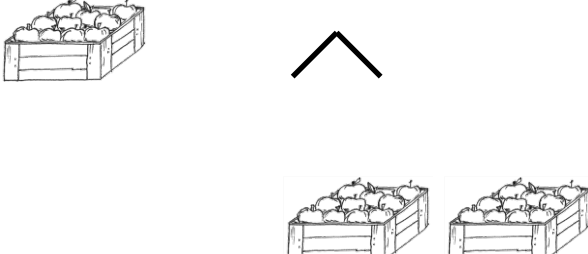
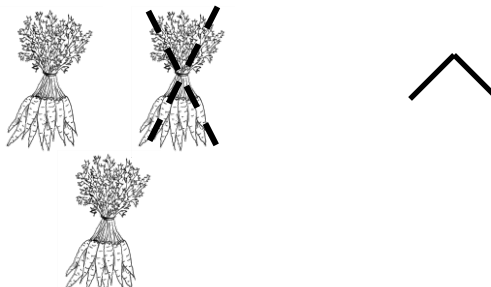

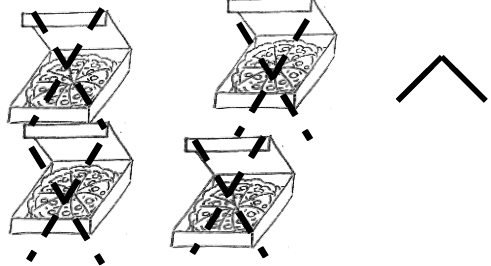
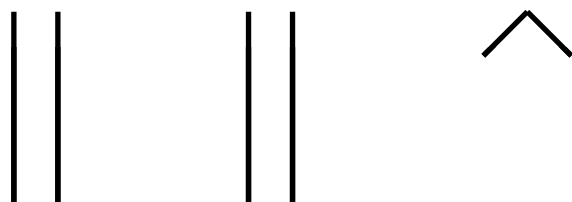






Name \_\_\_\_\_

Date \_\_\_\_\_

Draw a number bond and complete the number sentences to match the pictures.

<p>1.</p>  <p>_____ tens + _____ ten = _____ tens</p> <p>20 + 10 = 30</p>	<p>2.</p>  <p>_____ tens = _____ ten + _____ tens</p> <p>_____</p>
<p>3.</p>  <p>_____ tens - _____ ten = _____ ten</p> <p>_____</p>	<p>4.</p>  <p>_____ tens - _____ tens = _____ tens</p> <p>_____</p>
<p>5.</p>  <p>_____ tens - _____ tens = _____ tens</p> <p>_____</p>	<p>6.</p>  <p>_____ tens + _____ tens = _____ tens</p> <p>_____</p>

Draw quick tens and a number bond to help you solve the number sentences.

7.    $10 + 20 = \underline{\hspace{2cm}}$	8.    $30 - 10 = \underline{\hspace{2cm}}$
9.    $20 - 10 = \underline{\hspace{2cm}}$	10.    $30 + 10 = \underline{\hspace{2cm}}$

Add or subtract.

11. 2 tens + 1 ten =         

12. 20 + 20 =         

13. 40 - 10 =         

14.          = 20 + 10

15. 3 tens - 2 tens =         

16. 20 - 10 =         

17. 10 - 10 =         

18.          = 30 + 10

19. 40 - 30 =