

Name \_\_\_\_\_ Date \_\_\_\_\_

Use number bonds to show your thinking. Write the 10+ fact.

1.  $8 + 3 = \underline{\quad}$                        $10 + \underline{\quad} = \underline{\quad}$

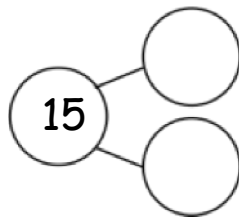
2.  $6 + 8 = \underline{\quad}$                        $\underline{\quad} + 10 = \underline{\quad}$

3.  $\underline{\quad} = 8 + 8$                        $\underline{\quad} = 10 + \underline{\quad}$

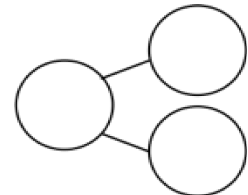
4.  $\underline{\quad} = 5 + 8$                        $\underline{\quad} = 10 + \underline{\quad}$

Complete the addition sentences.

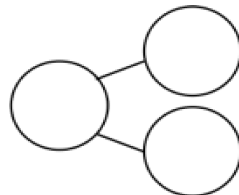
5. a.  $7 + 8 = \underline{\quad}$



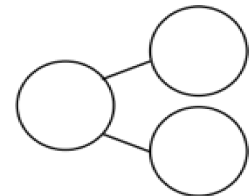
b.  $10 + 5 = \underline{\quad}$



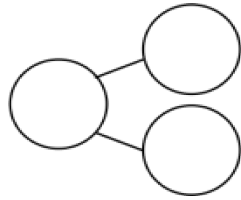
6. a.  $16 = \underline{\quad} + 8$



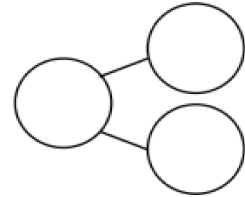
b.  $10 + 6 = \underline{\quad}$



7. a.  $\underline{\quad} = 9 + 8$



b.  $10 + 7 = \underline{\quad}$



Draw a line to the matching number sentence. You may use a number bond or 5-group drawing to help you.

8.  $11 = 8 + 3$

$8 + 6 = 14$

9. Lisa had 5 red rocks and 8 white rocks.  
How many rocks did she have?

$10 + 1 = 11$

$13 = 10 + 3$

10.

