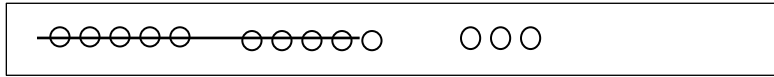


Name \_\_\_\_\_

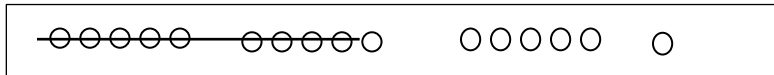
Date \_\_\_\_\_

Write the number sentence for each 5-group row drawing.

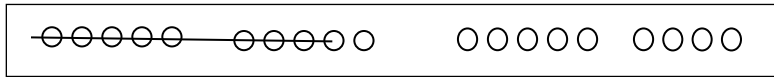
1.



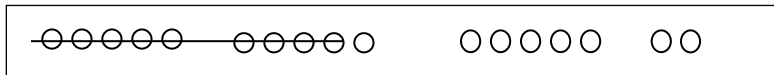
$$13 - 9 = 4$$



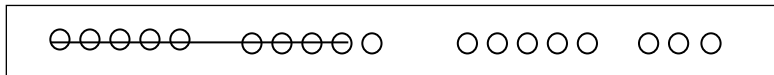
\_\_\_\_\_



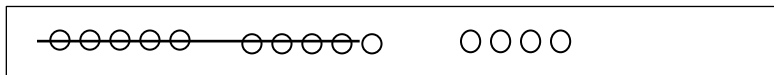
\_\_\_\_\_



\_\_\_\_\_



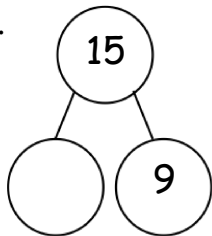
\_\_\_\_\_



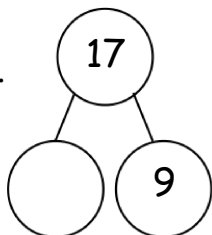
\_\_\_\_\_

Draw 5-groups to complete the number bond and write the 9- number sentence.

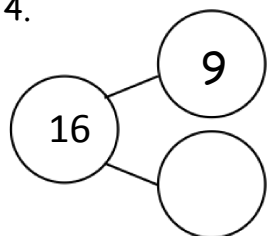
2.



3.

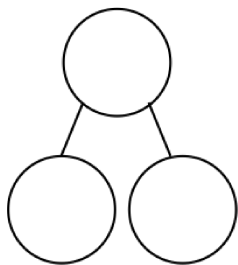


4.



Draw 5-groups to show making ten and taking from ten to solve the two number sentences. Make a number bond and write two additional number sentences that would have this number bond.

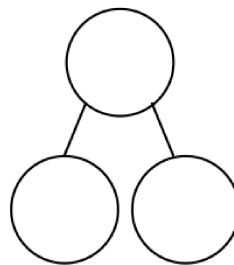
5.  $8 + 9 = \underline{\quad}$



---

---

6.  $17 - 9 = \underline{\quad}$



---

---