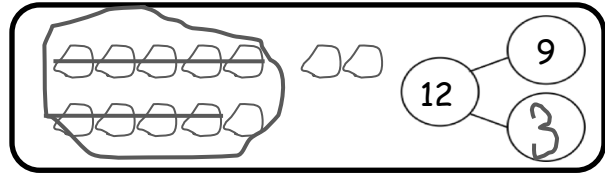


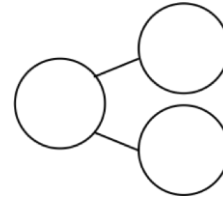
Name \_\_\_\_\_

Date \_\_\_\_\_

Circle 10 and subtract. Make a number bond.



1.  $15 - 9 = \underline{\quad}$



Draw and circle 10. Subtract and make a number bond.

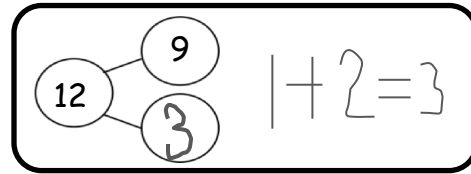
2.  $14 - 9 = \underline{\quad}$

3.  $12 - 9 = \underline{\quad}$

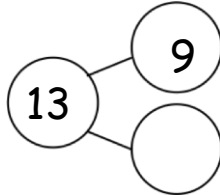
4.  $13 - 9 = \underline{\quad}$

5.  $16 - 9 = \underline{\quad}$

6. Complete the number bond and write the number sentence that helped you.

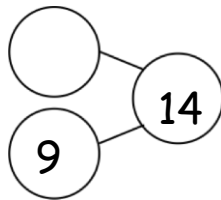


a.



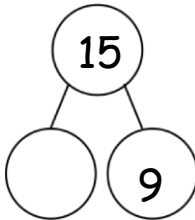
\_\_\_\_\_

b.



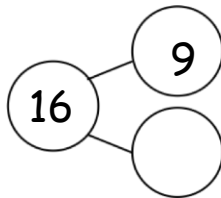
\_\_\_\_\_

c.



\_\_\_\_\_

d.



\_\_\_\_\_

7. Make the number bond that would come next and write a number sentence that matches.