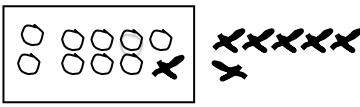


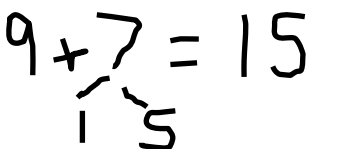
Name _____

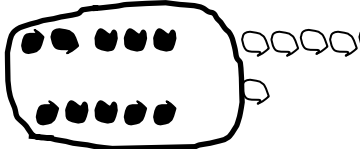
Date _____

Look at the student work. Correct the work. If the answer is incorrect, show a correct solution in the space below the student work.

1. Todd has 9 red cars and 7 blue cars. How many cars does he have altogether?

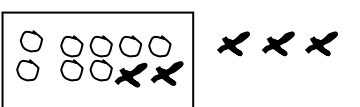
Mary's work


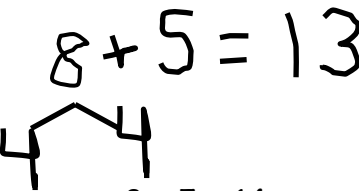
$$9 + 7 = 16$$
Joe's work



$$9 + 7 = 15$$
Len's work


$$9 + 7 = 16$$

2. Jill has 8 beta fish and 5 goldfish. How many fish does she have in total?

Frank's work


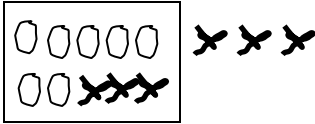
$$8 + 5 = 13$$
Lori's work


$$8 + 5 = 14$$
Mike's work


$$8 + 5 = 13$$


3. Dad baked 7 chocolate and 6 vanilla cupcakes. How many cupcakes did he bake in all?

Mary's work




$13 = 7 + 6$

Joe's work



$10 + 3 = 13$

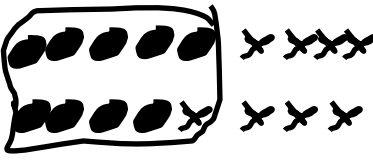
Lori's work



$7 + 6 = 13$

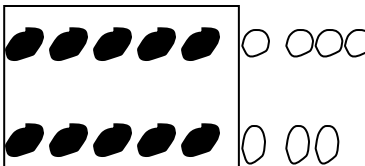
4. Mom caught 9 fireflies and Sue caught 8 fireflies. How many fireflies did they catch altogether?

Mike's work




$10 + 7 = 17$

Len's work



$17 = 9 + 8$

Frank's work



$18 = 9 + 8$