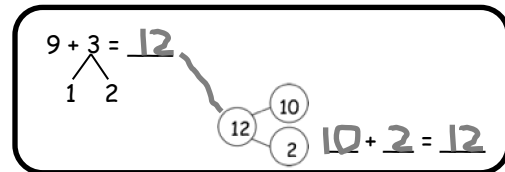


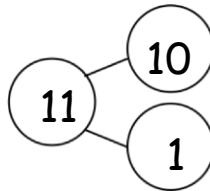
Name _____

Date _____

Solve. Match the number sentence to the 10+ number bond that helped you solve the problem. Write the 10+ number sentence.

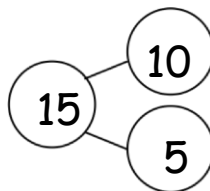


1. $8 + 6 = \underline{\quad}$



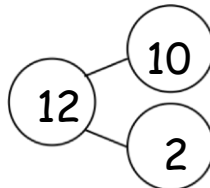
$\underline{\quad} + \underline{\quad} = \underline{\quad}$

2. $7 + 5 = \underline{\quad}$



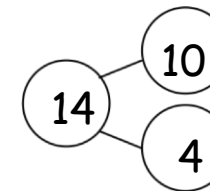
$\underline{\quad} + \underline{\quad} = \underline{\quad}$

3. $5 + 8 = \underline{\quad}$



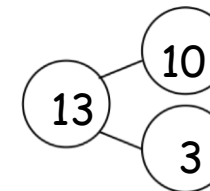
$\underline{\quad} + \underline{\quad} = \underline{\quad}$

4. $4 + 7 = \underline{\quad}$



$\underline{\quad} + \underline{\quad} = \underline{\quad}$

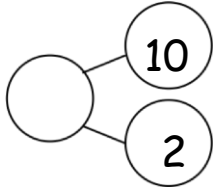
5. $6 + 9 = \underline{\quad}$



$\underline{\quad} + \underline{\quad} = \underline{\quad}$

Complete the number sentences so they equal the given number bond.

6.

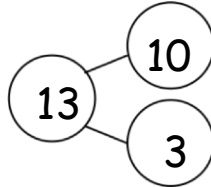


$$9 + \underline{\quad} = 12$$

$$8 + \underline{\quad} = 12$$

$$7 + \underline{\quad} = 12$$

7.

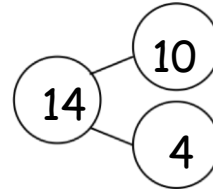


$$9 + \underline{\quad} = 13$$

$$8 + \underline{\quad} = 13$$

$$7 + \underline{\quad} = 13$$

8.

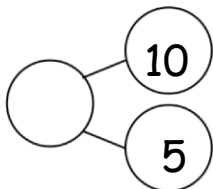


$$9 + \underline{\quad} = 14$$

$$8 + \underline{\quad} = 14$$

$$7 + \underline{\quad} = 14$$

9.

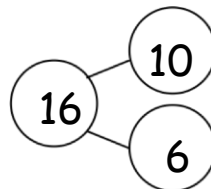


$$15 = 9 + \underline{\quad}$$

$$\underline{\quad} = 8 + \underline{\quad}$$

$$\underline{\quad} = 7 + \underline{\quad}$$

10.

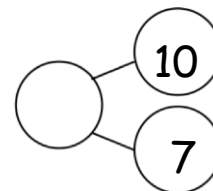


$$16 = 9 + \underline{\quad}$$

$$\underline{\quad} = 8 + \underline{\quad}$$

$$7 + \underline{\quad} = \underline{\quad}$$

11.



$$\underline{\quad} = 9 + 8$$

$$\underline{\quad} = 8 + \underline{\quad}$$

$$\underline{\quad} = 7 + \underline{\quad}$$