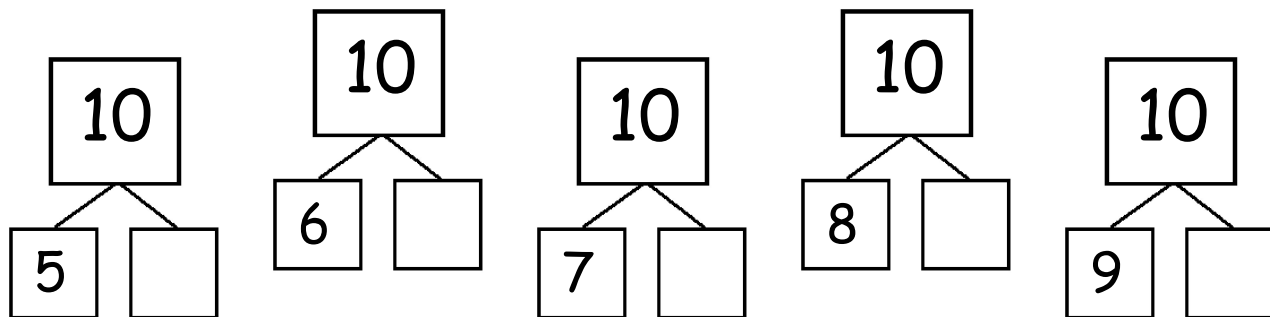
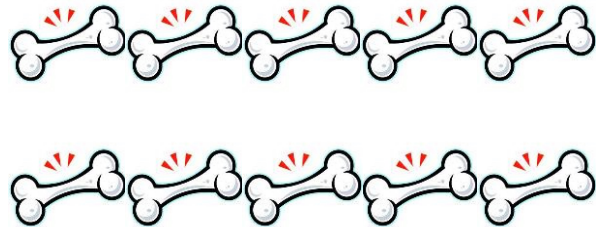



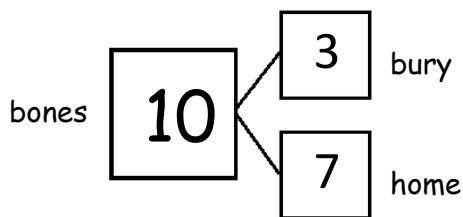
Name \_\_\_\_\_

Date \_\_\_\_\_

1. Rex found 10 bones on his walk. He can't decide which part he wants to bring to his doghouse and which part he should bury. Help show Rex his choices by filling in the missing parts to the number bonds.



2. He decided to bury 3 and bring 7 back home. Write all the adding sentences that match this number bond.



$$\square + \square = \square$$

$$\square + \square = \square$$

$$\square = \square + \square$$

$$\square = \square + \square$$

