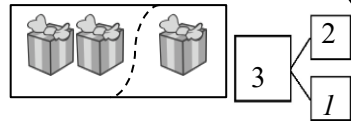


Name _____

Date _____

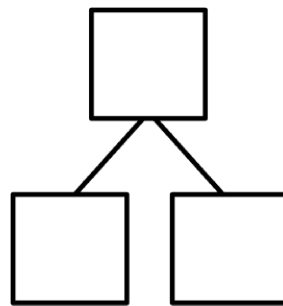

Break the total into parts. Write a number bond and addition and subtraction number sentences to match the story.



$$2 + 1 = 3$$

$$3 - 2 = 1$$

1. Six flowers bloomed on Monday. Some more bloomed on Tuesday. Now there are 8 flowers. How many flowers bloomed on Tuesday?

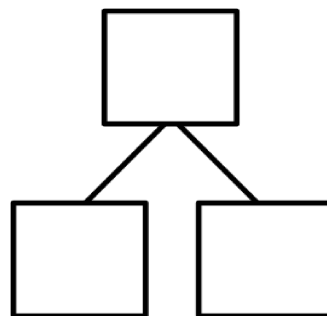
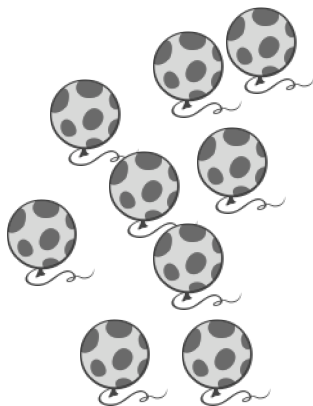


$$\square + \square = \square$$

$$\square - \square = \square$$

_____ flowers bloomed on Tuesday.

2. Below are the balloons that Mom bought. She bought 4 balloons for Bella and the rest of the balloons were for Jim. How many balloons did she buy for Jim?



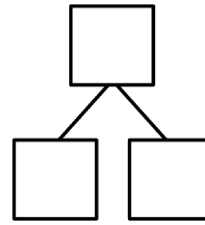
$$\square + \square = \square$$

$$\square - \square = \square$$

Mom buys Jim _____ balloons.

Draw a picture to solve the math story.

3. Missy buys some cupcakes and 2 cookies.
Now she has 6 desserts. How many
cupcakes did she buy?

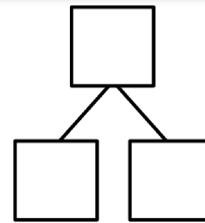


$$\square + \square = \square$$

$$\square - \square = \square$$

Missy bought _____ cupcakes.

4. Jim invites 9 friends to his party.
3 friends arrived late, but the rest came
early. How many friends came early?

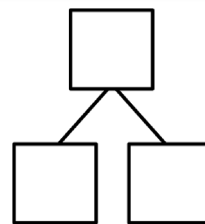


$$\square + \square = \square$$

$$\square - \square = \square$$

_____ friends came early.

5. Mom paints her fingernails on both hands.
First she paints 2 red. She paints the rest
pink. How many fingernails are pink?



$$\square + \square = \square$$

$$\square - \square = \square$$

Mom paints _____ fingernails pink.