

Name \_\_\_\_\_




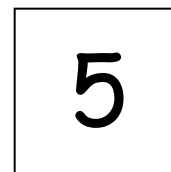
Date \_\_\_\_\_

2






2

$2+2=4$

Draw the 5- group card to show a double. Write the number sentence to match the cards.



Fill in the 5- group cards in order from least to greatest, double the number, and write the number sentences.



Solve the number sentences.

$$3 + 3 = \underline{\quad}$$

$$5 + \underline{\quad} = 10$$

$$1 + \underline{\quad} = 2$$

$$4 = \underline{\quad} + 2$$

$$8 = 4 + \underline{\quad}$$

Match the top cards to the bottom cards to show doubles plus 1.

1

4

3

2

5

2

3

4

Solve the number sentences. Write the double fact that helped you solve the double plus one.

$$2 + 3 = \underline{\quad}$$

$$3 + \underline{\quad} = 7$$

$$4 + \underline{\quad} = 9$$