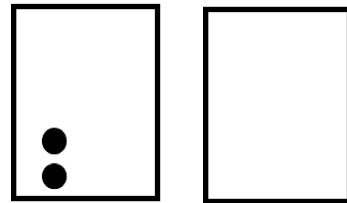


Name _____

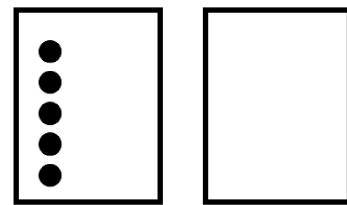
Date _____

1. Use the 5- group cards to count on to find the missing number in the number sentences.

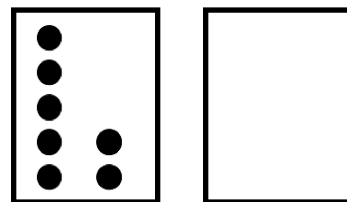
$$\boxed{2} + \boxed{} = \boxed{7}$$



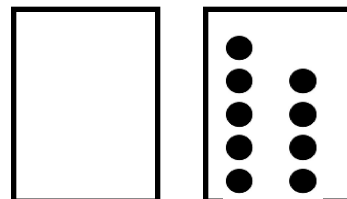
$$\boxed{8} = \boxed{5} + \boxed{}$$



$$\boxed{9} = \boxed{7} + \boxed{}$$



$$\boxed{9} = \boxed{} + \boxed{9}$$



Match the number sentence to the math story. Draw a picture or use your 5-group

cards to solve.

Scott has 3 cookies. His mom gives him some more. Now he has 8 cookies. How many cookies did his mom give him?

Now Scott has _____ cookies.

$$\boxed{6} + \boxed{?} = \boxed{9}$$

$$\boxed{3} + \boxed{?} = \boxed{8}$$

Kim sees 6 birds in the tree.

Some more birds fly in.

Kim sees 9 birds in the tree. How many birds fly to the tree?

_____ birds fly to the tree.

$$\boxed{4} + \boxed{?} = \boxed{8}$$