

PowerSchool SMS Copyright © 1998-2013 Pearson Education, Inc., or its affiliate(s). All rights reserved.

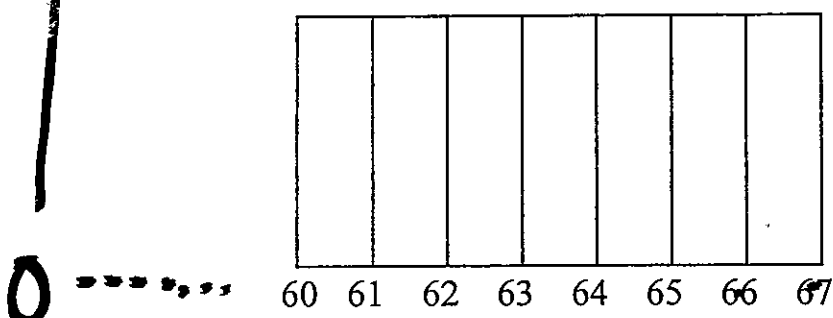
II. Using Latitude and Longitude

These are lines of Longitude.

Is this map area in the Eastern or Western Hemisphere?

W

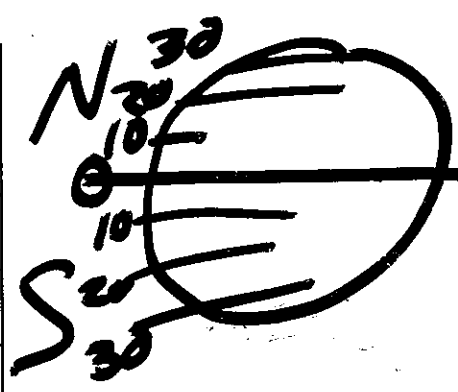

E



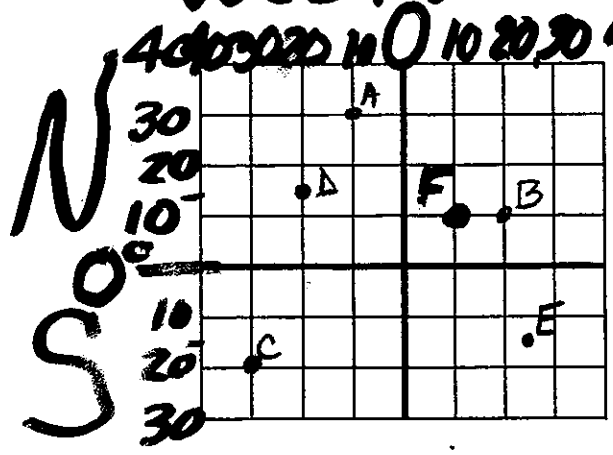
- ① Where's the zero?
- ② Which side?

• These are lines of Latitude.

• Is this map area in the Northern or Southern Hemisphere?



West East



	Latitude	Longitude
A	30°N	10°W
B	10°N	20°E
C	20°S	30°W
D	15°N	20°W
E	15°S	25°E
F	10°N	10°E

2/10